

Azaan International School

Grammar Worksheet

Grade: VIII _____

Subject: English

Name of the student: _____

Date: _____

TOPIC: ACTIVE AND PASSIVE

A. Put the verbs in brackets into a suitable Passive Form:

1. Hunters _____ (catch) by the forest authorities. (Present Indefinite)
2. Neha _____ (call) by the office manager in her office. (Present Continuous)
3. All telephone wires _____ (cut) by them. (Present Perfect)
4. Has the window _____ (break) by somebody? (Present Perfect)
5. He _____ (crown) king. (Past Indefinite)
6. A letter _____ (write) by Madhu to her mother. (Past Continuous)
7. Their work _____ (not do) by them. (Past Perfect)
8. Had all the cakes _____ (eat) by the crazy boys? (Past Perfect)

B. Read the following sentences and fill in the blanks in the blanks with correct alternatives using the Passive Voice:

(1) 1. All trust an honest man.

An honest man _____ by all.

- a. trusts b. was trusted c. is trusted d. trusted

2. Either by the left door.

You _____ by the left door.

- a. should enter b. are to enter c. enter d. are entered

3. Has somebody opened the front gate?

Has the front gate _____ by some body?

- a. opened b. been opened c. was opened d. been opened

(2) 1. The policeman caught the wrong man.

The wrong man _____ by the policeman.

2. They were making a noise.

A noise _____ by them.

- a. was being made b. was made c. was making d. were being made

3. Did the policeman catch the thief?

Was the thief _____ by the policeman?

- a. Catch b. being caught c. catched d. caught

III. Change the following sentences into the Passive voice and write your answers in the given space:

1. She has caught a cold.

2. Who has written this article on Nehruji?

3. They have stolen our jewellery.

4. Raman lent her ten lakh rupees.

5. They may not have sent the money.

6. Let me solve the problem.

7. You must take care of your health.

8. Please read it for me.

9. Should we not give alms to the beggars?

10. The players of the defeated team ought not blame their coach.

Azaan International School

Self-Assessment – 2019

Grade: VIII
Time: 20 min

Subject: English
Marks: 10M

Name of the student: _____ Date: _____

DIRECT AND INDIRECT SPEECH

I. Change the following from direct to indirect speech:

1. My sister said to me, "can you lend me your dress?"

2. Pawan said to Neha, "Why did Rohan leave so early?"

3. "Wait here till I return," the mother said.

4. The child said, "Mummy, please buy me a new pair of jeans."

5. The girl said, "how beautiful the sky is!"

6. "Best of luck!" said the examiner.

7. "How pretty you are!" said the fox to the nightingale.

8. She cried, I will never steal again!"

9. May I take my dog with me?" said the passenger.

10. Mom said to my uncle, "can you buy four tickets for us?"

Azaan International School

Practice Worksheet

Grade: VIII

Subject: English

CONDITIONALS

A. Identify the conditional sentences below and categorise them as Expressing a future event, Imaginary situation or Always true when the condition is met.

1. If I met an angel, I would ask her to fulfill my wishes.
2. If Diana agrees to train me, I will certainly achieve the Grammy award.
3. If I am nervous, I usually press my hands together.
4. If I wake up early, I go for a long walk.
5. If I get a chance, I will participate in car race this season.
6. If You were a joker, what would you do to make people laugh?

B. Complete the following by supplying a suitable tense form of the verbs given in brackets:

1. If you try hard, you _____ [get] success.
2. He would have come if he _____ [know] you were here.
3. If it _____ [be] convenient, lets meet at nine o clock.
4. I am sure my sister would go out with you if you _____ [ask] her nicely.
5. If it rains you _____ [get] wet.

C. Complete the following sentences using the correct type of conditional:

1. If he had taken my advice, _____
2. We will send for the doctor if _____
3. If there is not enough flow for the cake _____
4. If we leave breakfast, _____
5. If I had had a car, _____
6. If the storm becomes worse, _____
7. If my mother sees you like this, _____
8. She would be able to walk faster _____

Azaan International School

Practice Sheet

Grade: VIII _____

Subject: English

Name of the student: _____

Date: _____

GLOSSARY

I. Match the words in column A with their meanings in column B:

A	B
1. Blotchy	a. New and unusual things
2. Hearth	B .Causing feelings of pity or sadness
3. Dithering	C .A large number
4. Incredibly	d. Unbelievably
5. Dainty	e. Crying and complaining in an amazing way
6. Tantalizing	f. Patchy, uneven
7. Gallant	g. Tempting, teasing
8. Connoisseur	h. Limitations or restrictions
9. Novelties	i. Full of very strong emotions
10. Myriad	J .Extremely shocking
11. Tempestuous	K .The floor of a fireplace
12. Scabbard	l. An expert in something
13. Pathetic	m. Careful in a way suggesting good manners
14. Constraints	n. Hesitating because of being unable to decide
15. Sniveling	O .A cover for a sword
16. horrendous	p. Chivalrous, courteous

II. Fill the blanks to complete the sentence using the correct word that fits in the

sentence:

Gutsy galled squeaky slosh inane hollering sneer laurel fray
Caress pragmatic deplorable lithe conviction

1. The actors are very good, but when all is considered, the _____ must surely go to the director of the play.
2. With a third country about to enter the _____, the fighting looks set to continue.
3. He was a fabulous athlete , full of _____ , quick movements.
4. The audience enthralled the _____ performance of the artist in the circus.
5. In business, the _____ approach to problems is often more successful than an idealistic one.
6. It _____ him to take orders from a less experienced colleague.
7. He was _____ something about seeing a snake.
8. He said he was enjoying his new job, but his voice lacked _____
9. Water _____ over the sides of the pool as the children jumped in it.
10. He's always making _____ remarks.
11. She closed her eyes, and lifted her face to the sun, enjoying its light, warm _____ on her cheeks.
12. They are forced to live in _____ conditions.
13. She'll most probably _____ at my new shoes because they're not expensive.
14. The door swung open on its _____ hinges.

III. Choose the meaning of the words given from the options provided:

1. Blemish

- a. Praise b. a mark or spot c. blame d. curiosity

2. Propped

- a. To hide b. to enter slowly c. supported to keep in position d. none of the options

3. Elite

- a. Beautiful b. cunning c. stylish d. rich and powerful people in society

4. Throbbing

- a. Pushing b. jumping c. beating d. shouting

5. Grotty

- a. Unpleasant b. selfish c. brooding d. daring

IV. Underline the wrongly spelt words:

1. In the third place, she's got frekels
2. My friend gifted me snickers on my birthday
3. "and lord, may my shouts be ungrujjing and clear"
4. "And let me not cherish a snal or a snear
5. "That is when I realized how diplorabal the state of education was in the region."
6. Sonam Wangchuk comes across as a very affable, humble human being
7. He will not go on the monthly outing to civilization because of financial bankruptcy.
8. Maybe I was adopted , picked up from the roadside, or a deadfull orphanage
9. Our monthly dayout is approaching
10. His bridal rains were golden chains

Spelling and Vocabulary

Fill in the blanks with suitable similes from the box.

as smooth as silk like an angel like butter as red as rose petals
as fast as a cheetah sly as a fox soft as a dove

1. The baby face looked
2. Her hair is, and her cheeks are
3. The ice melted under the hot sun.
4. He is a great athlete. He runs
5. The fabric is
6. She is

The following sentences are written in similes. Rewrite them using metaphors.

1. He fought like a lion in the war.
.....
2. Ishita's personality is like the sunshine.
.....
3. Emily Dickinson wrote that hope is like a thing that has feathers.
.....
4. Tushar solves puzzles so easily. He is like the Einstein of the class.
.....
5. The sun is like a big ball of fire.
.....
6. Although she is only five-year-old, her mind is like a computer.
.....

Read the following phrasal verbs, the nouns they form, and the meanings. Then, fill in the blanks with the correct nouns.

Phrasal verbs	noun	meaning
1. go ahead	go-ahead	permission granted to start a project/task
2. to work out	workout	to do physical exercise
3. to break in (to)	break-in	a burglary
4. to break down	breakdown	a situation that ends in failure

Read the following sentences. Write Yes for sentences that have irony, and No for the ones that do not have irony.

1. The son of the Police Chief was held for burglary.
2. The ambulance on its way to the hospital with the patient, was hit by a truck; there were no survivors.
3. She did not prepare well for the test and was unable to clear it.
4. The student in Class 8 with the highest marks, drops out of high school.
5. The residents cooperated to make the cleanliness campaign a success; everyone felt strongly about it.
6. Beethoven, a brilliant musician and composer, had gradually lost his hearing; he would imagine in his mind what his compositions sounded like.

A. USE THE SUFFIXES IN THE BOX TO MAKE ABSTRACT NOUNS OF THE WORDS IN THE BRACKETS AND COMPLETE THE SENTENCES.

-ty	-age	-hood	-nce	-ery
-----	------	-------	------	------

1. Many people in our country live in great _____ (poor)
2. _____ to animals is a punishable offence. (cruel)
3. My parents have taught me to avoid _____ of food, money, water and other resources. (waste)
4. _____ is believed to be the best time in one's life.
5. Every school ensures _____ of the children in its premise. (safe)
6. There are many tales of _____ of the great emperors of the Maurya dynasty. (brave)
7. Too much _____ about others affairs can lead you into trouble. (curious)
8. In order to test the _____ of new airline pilots, a special officer was brought in. (competent)
9. The president unexpectedly made an _____ at the press meeting, surprising everyone. (appear)
10. There is _____ of onions in the market due to the unseasonal rains and the prices have skyrocketed. (short)

Use the given context clues to understand the meaning of the words in bold. Write down their meaning in the blank given at the end of the sentence.

1. The landlord's son lost his hearing; he offered a reward for anyone with a **remedy** for it.
.....
2. If you keep **quarrelling** with each other over who cheated, instead of playing the game, you will not have any fun.
3. When the final exams got over, I felt an **enormous** sense of relief.
4. Seeing the sticky peanut butter **smeared** around his mouth, I knew what he had had for breakfast.
5. After studying all the clues carefully, the Detective **established** that the butler was the most likely suspect.
6. It was a cold and **dreary** day; there was no sun and the weather was cold and wintry.

Circle the words that are antonyms of the words in bold.

- | | | | | |
|-----------------------|-------------|-------------|-------------|---------|
| 1. bustle | convenience | agitation | inactivity | comfort |
| 2. conceal | expose | shroud | screen | obscure |
| 3. buckle | purify | adulterate | straighten | droop |
| 4. discrepancy | difference | obvious | consistency | variety |
| 5. clumsy | shabby | dishevelled | long | tidy |
| 6. scatter | fritter | gather | together | dispel |

Complete these sentences using the correct words given in the brackets.

1. Most authors value their privacy, and write under a
(acronym/pseudonym)
2. We hired a plumber and we hope he can out the problem for the
seepage. (ferret/fend)
3. He has begun to be rather in class, keeping to himself and everyone is
concerned about this change in his behaviour. (aloof/articulate)
4. The top soil is and allows water to reach the lower layers and thus
nourish the roots. (porous/potent)
5. I cannot be to my friends' troubles, I am always ready to lend a
helping hand. (indifferent/susceptible)
6. There was so much in the sea that the ship rocked from side to side
dangerously. (opulence/turbulence)
7. The aim of this computer workshop is to make us in MS applications.
(sufficient/proficient)
8. To people from entering our property, we had a fence of flowering
trees. (dissuade/persuade)

Tick the suitable synonyms in the brackets for the underlined words.

1. After the heavy rains, the stream became murky; in fact, you could barely see the bottom.
(opaque/cloudy/clear)
2. The match got over and the stadium cleared of people-but the dustbin overflowed with
debris. (trash/ dust/paper)
3. The young executives were very frugal in the preparations for the staff party; after all it
was their first job! (wasteful/economical/miserly)
4. The boss criticised his staff for not getting the contract. (analysed/censured/approved)
5. We read through and eliminated all the weak points in the presentation before the final
submission. (rejected/ proposed/ questioned)
6. Tanjore paintings are a very traditional form of art from South India from 1600 AD, still
continuing in all its glory. (routine/long-established/ common)
7. The police team have yet to accumulate enough evidence to prove the manager's guilt and
arrest him. (gather/ spread/bring)
8. Though they belong to the Royal family, they dressed and lived like ordinary people.
(simple/ shabby/poor)

B. MATCH THE FOLLOWING PHRASAL VERBS WITH THEIR MEANINGS.

- | | |
|-------------------------------------|---|
| 1. Front runner | a. to get the wrong person/idea |
| 2. Hit a home run | b. to do a fantastic job |
| 3. To strike out | c. do or say more than you need to |
| 4. Bark up the wrong tree something | d. the favourite person who is most likely to win |
| 5. To have the upper hand | e. start before the others |
| 6. Chip in | f. to fail at something |
| 7. Get a head start | g. have a better chance of succeeding |
| 8. Go overboard | h. to donate or help with time or money |

C. FILL IN THE BLANKS WITH THE SUITABLE PHRASAL VERBS FROM EXERCISE B.

1. Your blaming Mathew for the deal not working out is like _____, he is very sincere.
2. He got turned down for the job; he _____
3. Your chances for getting through the interview are very high. You are the _____
4. The public _____ complaining about the politicians and their blunders at the meeting; it was rather unpleasant
5. All of us _____ equally to buy our class teacher a Teacher's Day gift.
6. I reached office earlier in the morning _____ in preparing for the major conference that evening.
7. Our debating team _____ against all other competing teams, because they were trained by a senior from the university team.
8. You really _____. Your project presentation was judged to be the best.

D. FILL IN THE BLANKS WITH THE CORRECT IDIOMS FROM THE BOX.

A drop in the ocean	can't see the forest for the trees	down to earth
under the weather	a voice in the wilderness	make a mountain out of molehill
at sea	weather a storm	

1. He is capable person and has a supporting family; losing his job is hard on them but he will be able to _____
2. All efforts to collect funds, food and clothing for the cyclone hit areas is only _____; those people have lost everything they owned.
3. She is very _____ and you can rely on her completely; she is a hardworking and sincere in all her efforts.
4. I am feeling a little _____; please apologise on my behalf as I will not be attending the function.
5. We were all _____ about what courses and colleges to choose when grade 12 is over.
6. Calling for a meeting on the weekend? Yours will be _____; no one is going to turn up.

7. Don't _____ she has only forgotten the house key; the neighbor has the spare
8. When our parents turn us down for small things, we get upset and angry with them; we _____

E. FILL IN THE BLANKS WITH THE MOST SUITABLE WORD FROM THE GIVEN ONES.

Widely conveniently temporarily correctly casually tactfully

1. Shop attendants have to handle customers _____
2. The ATM machine is _____ out of order; it will be fixed soon.
3. Credit cards are now easy to use anywhere you travel; they are _____ accepted.
4. The school is _____ located close to the neighbourhood we are moving into.
5. Before you submit the answer sheet, check first to see that you have _____ numbered and answered each question.
6. The disguised officers _____ strolled by to see if there were any suspicious movements in the gathered crowd.

Grammar

F. FILL IN THE BLANKS WITH APPROPRIATE QUESTION TAGS AND THE EXPECTED SHORT ANSWERS.

1. Somebody ordered a pizza, _____?
2. We often sleep in the afternoon, _____?
3. There is no point in discussing this any further, _____?
4. You are really tired, _____?
5. I am clever, _____?
6. You aren't from Argentina, _____?
7. Our guests don't like spicy food, _____?
8. Bring the medicines when you come, _____?

G. UNDERLINE PHRASES IN THE SENTENCES AND SAY WHAT KIND OF PHRASES THEY ARE.

1. Students are advised to be on time.
2. They lived in an apartment, with a seaside view.
3. Our friends have bought a farmhouse.
4. Please turn towards the right to reach the supermarket.
5. She went to the house with the bright red wooden door.
6. These boys are from my school.
7. He is sleeping on the carpet.
8. She gifted me a bag full of toys.
9. She bought a beautiful black dress.
10. The boy in the blue shirt, is my brother.

Change the following imperative sentences into reported speech.

1. Mother said to her daughter, 'Put on your shoes.'

.....

2. The cashier said to the customer, 'Give me the receipt.'

.....

3. Amit said, 'Dad, please help me with my homework.'

.....

4. The ambulance driver said to the pedestrians, 'Move out of the way.'

.....

5. I said to my friend, 'You must tell everything clearly to your parents so they won't be worried.'

.....

6. The guard said to us, 'Do not park here.'

.....

7. The receptionist said to the waiting crowd, 'Do not block the entrance. Sit in the lounge area.'

.....

Underline the relative clauses in the sentences. Write D for defining clauses and ND for non-defining ones.

1. This is my cousin whom I was talking about.
2. Hercules, who was the son of the Greek God Zeus, was very powerful.
3. Here is the magazine which published my story.
4. My uncle, who lives in Canada, sent me a video game.
5. Tista, my sister's friend, won the tennis championship this year.
6. Can you give me the red bag that is lying on the bed?

Complete the sentences using correct clauses from the box. Insert commas wherever necessary. Also, say whether the clauses that you inserted are defining or non-defining.

which was written by Chanakya the capital of India

that had floral designs on it who knows how to manage multiple tasks at a time

the adorable bear my classmate

1. Martha is a clever girl, (.....)
2. I think Danny, knows the route to the station. (.....)
3. Have you read the *Arthashastra*,? (.....)
4. The character of Winnie the Pooh, is based on the stuff toy owned by A.A. Milne's son. (.....)
5. Delhi, is struggling against pollution. (.....)
6. Selja was wearing a gown (.....)

Topic – Simple, Compound and Complex Sentences

I. Combine these simple sentences to form compound sentences.

1. She was not very well educated. She ran a successful business.
2. Tagore was a novelist. Tagore wrote poetry.
3. He worked hard. He got through the competition.
4. She must leave now. She will be late.
5. You must go with Mala. You must ask somebody to go with her.

II. Join the following sentences to form complex sentences. Use the words in brackets to help you:

1. You will see him. You will like him. (when)
2. He failed in the examination. He did not study. (because)
3. There was one question on grammar. I could not answer it. (which)
4. That is the school. I studied there. (where)
5. The grapes hung over the garden wall. The fox saw the grapes.

III. Write whether each of the sentences is a simple, complex or compound sentence:

1. God helps those who help themselves.
2. Uneasy lies the head that wears the crown.
3. He can buy justice because he is rich.
4. The old man was begging near the school.
5. She must leave now for it is already late.
6. He will come either on Sunday or not come at all.
7. I lost the pen that my sister gave me.
8. Our train went to Jaipur.
9. I do not know why he has gone home.
10. I always speak the truth.

Topic - Tenses of Verbs:

I. Complete the following sentences with the present perfect forms of the verbs in brackets:

1. We _____ a lot of money for charity show for the earthquake victims. (collect)
2. Since the holidays started, we _____ no rest. (have)
3. We _____ lots of sandwiches and other snacks for the trip. (pack)
4. I don't need your company . I _____ alone. (always travel)
5. We _____ a good movie for a long time now.(not see)

II. Use the present perfect continuous tens in the following sentences:

1. Tippy _____ us lately. (not visit)
2. Sara _____ the piano since she was in Class II. (play)
3. Manish and Kiran _____ badminton for a long time. (play)
4. Mira and Shilpa _____ for days. (not talk)
5. Shyna _____ rather well during the last few months.(perform)

III. Rewrite the following sentences making corrections where needed:

1. I was liking the new movie.
2. They were having two cars but they sold one last month.
3. The parents were wait to meet the Principal.
4. I told them not to disturb me. At that time I am studying for the exams.
5. When I get home, my dog was waiting for me at the door.

PAST PERFECT CONTINUOUS:

1. Tarun _____ , so he lost the match. (not practice)
2. They _____ in Kerala for most of their lives. (live)
3. The baby _____ all day. (sleep)
4. The child _____ in the garden for four hours. (sit)
5. I _____ in the garden for two hours, when it started to rain. (work)

IV. Fill in the blanks with the appropriate future tense forms of the verbs given in brackets to complete these sentences:

1. The doctor _____ your society next Friday. (visit)
2. We _____ on Friday to finalize all arrangements for the farewell party. (meet)
3. I _____ twelve years next month. (complete)
4. I'm sorry, I _____ The assignment by tomorrow. (not finish)
5. This time tomorrow she _____ to Mumbai. She _____ surprised when she gets the tickets for the show. (fly, be)

V. Attempt the following writing tasks:

1. Write a letter to the health officer of your city, complaining about the accumulation of garbage at the street corner.
2. Write a letter to the School Principal asking for permission to stay back after school and use the library for the project work.

Azaan International School

Peer - Assessment – 2019

Grade: VIII
Time : 20 min

Subject: English
Marks : 10

Name of the student: _____

A. Tick the correct words to complete the sentences:

5m

1. I would like to proceed /precede with my story.
2. The government's decision to raise the taxes was met with dissent /descent.
3. The Principal assured the parents that she would counsel/council the students before they sat for the Class XII examination.
4. We were happy and pleasantly surprised to accept /expect/ except the warm hospitality of the opponents.
5. Children are the ones who will feel the effect /affect of this decision of the government.
6. A cool refreshing drink and a fresh salad will complement /compliment a good meal on a warm summer evening.
7. My neighbor would always insure /ensure that his dog was fed and had a bowl of fresh water near his basket.
8. Assure /ensure your son that he is playing the keyboard well, so that he feels confident for performance.
9. He courted/ quoted the words once again.
10. She went on a long leave/live.

B. Match the situations with the correct proverb:

(5M)

a. All that glitters is not gold	<input type="checkbox"/>	Ram forgot the experiment that he had to write in the test my science teacher was no good he said. She never taught us properly .
b. Many hands make work light	<input type="checkbox"/>	Mr. Dey, Mrs Dey, her sisiter,her parents and her nephew were trying to teach little Rahul to solve and arithmetic sum and the end result was – he was utterly confused
c. A bad workman always blames his tools	<input type="checkbox"/>	The new transistor that my maid bought shone like Silver, but broke down in two days
d. Too many cooks spoil the broth	<input type="checkbox"/>	Everyone in our colony took turns to clean up the streets and now our colony is the cleanest in Chennai
e. The early bird catches the worm.	<input type="checkbox"/>	Keshav won one crore rupees in a lottery but all his friends cheated him now he is left with nothing
	<input type="checkbox"/>	My friends went to the reservation counter two hours before time and they got the best seats

Azaan International School

Self - Assessment – 2019

Grade: VIII
Time : 20 min

Subject: ENGLISH
Marks : 10

Name of the student: _____

TOPIC : Simple, Compound and Complex Sentences

I. Write whether the following sentences are Simple (S) Compound (M) or Complex (C)

3m

- a) Priyanka learned to drive. _____
- b) Neetu won the lottery and gave the money to her parents. _____
- c) I'll meet my friend after I have finished my work. _____
- d) Since he was poor, he could not afford a decent education. _____
- e) Rajat has shifted to Gurgaon. _____
- f) Deepak went to practice because he had to play a test match. _____

II. Combine the sentences in each set to write a complex sentence.

3m

- a) Nitin is innocent. This is our belief.

- b) I was not feeling well. I came back early.

- c) Ayesha enjoys reading. Her favourite author is J.K.Rowling.

III. Combine each pair of simple sentences into one Compound sentence.

4m

- a) He did not succeed. He had tried his best.

- b) You must help your friend. It is your duty.

- c) The second class compartment is full. We cannot travel first- class with second- class tickets.

- d) Is the baby asleep? Is the baby awake?

Azaan International School

Practice Worksheet -2

Grade: VIII

Subject: Mathematics

- Find the cube root of the following numbers by Prime factorization method:
a. 4913 b. 59319 c. 91125 d. 110592
- Find the cube root of the following by estimation method.
a. 658503 b. 54872 c. 9261 d. 91125
- Which of the following numbers are not perfect cubes?
a. 5324 b. 2437 c. 3375 d. 74088
- Find the smallest numbers by which each of the following numbers must be multiplied to obtain a perfect cube:
a. 135 b. 92 c. 3267
- Find the smallest number by which each of the following numbers must be divided to make a perfect cube:
a. 1125 b. 3087 c. 8192

Azaan International School

Practice Worksheet -1

Grade: VIII

Subject: Mathematics

1. Find the square Root of the following by division method:

a. 9801 b. 54756 c. 26569 d. 57121 e. 12100 f. 27225

2. Find the square root of the following:

a. 4.41 b. 4.6225 c. 150.0622 d. 497.29 e. 98.01 f. 31.36

3. Find the least number which must be added to 1500 so as to get a perfect square number.

Also find the square root of the perfect square number.

4. Find the least number which must be subtracted from 4216 so as to get a perfect square.

Also find the square root of this perfect square number.

5. Total number of trees in a garden is 8281. If a gardener wants to plant equal no. of trees in

rows and column. Find the no. of rows of trees in the garden to be planted.

Azaan International School

Self / Peer - Assessment –Sep 2019

Grade: VIII
Time : 20 min

Subject: Hindi
Marks :20

कार्यपत्रक – 2

I. निम्नलिखित गद्यांश को पढ़कर उचित विकल्प को चयन कीजिए।

5M

प्रत्येक नागरिक के कुछ कर्तव्य और अधिकार होते हैं। नागरिक का सबसे बड़ा कर्तव्य यह है कि वह अपने देश की सुरक्षा एवं शांति के लिए सदा प्रयत्नशील रहे। यदि देश पर कोई विदेशी आक्रमण हो या देश की सुरक्षा एवं शांति खतरे में पड़े अथवा देश में कोई उपद्रव हो, तो उस समय वह बिना दुविदा में पड़े सरकार की सहायता करें। प्रजातंत्र में जनता की चुनी हुई सरकार होती है। इसलिए हर प्रकार से सरकार के हाथ मजबूत करना चाहिए। सरकार का काम धन से चलता है और धन सरकार को करों द्वारा प्राप्त होता है। अतः प्रत्येक नागरिक का कर्तव्य है कि वह ईमानदारी से करों का भुगतान करें।

1. व्यक्ति का सबसे बड़ा कर्तव्य क्या है?

()

क. सिर्फ अपने परिवार का लाभ

ख. अपने देश की सुरक्षा एवं शांति

ग. केवल अपना लाभ

2. प्रजातंत्र में कैसी सरकार होती है?

()

क. जनता के द्वारा चुनी हुई सरकार

ख. सरकार के द्वारा चुनी हुई सरकार

ग. इनमें से कोई नहीं

3. सरकार को धन कहाँ से प्राप्त होता है?

()

क. व्यापार के द्वारा

ख. विदेश के द्वारा

ग. करों के द्वारा

4. 'सुरक्षा' और 'शांति' का विलोम शब्द है-

()

क. शांति और सुरक्षा

ख. असुरक्षा और अशांति

ग. असुरक्षित और अशांत

5. दिए गए शब्दों में शुद्ध शब्द है-

()

क. आक्रमण

ख. आकर्मण

ग. आक्रमण

II. बहुविकल्पी प्रश्नोत्तर-

5M

1. कवि का अभी क्या नहीं होगा-

()

क. कन्त

ख. संत

ग. अंत

घ. पंथ

2. 'ध्वनि' कविता में किस ऋतु का नाम आया है-

()

क. ग्रीष्म

ख. पावस

ग. शरद

घ. वसंत

3. बदलू लेखक को क्या कह कर पुकारता था।

()

क. बच्चा

ख. लला

ग. मुन्ना

घ. बचुआ

4. 'बस अनुभवी है। हमें बेटों की तरह प्यार से गोद में लेकर चलेगी' यह कथन किस मित्र का है-

()

क. डॉक्टर

ख. वकील

ग. अध्यापक

घ. इंजीनियर

5. अब उन्होंने कहाँ वक्त पर पहुँचने की उम्मीद छोड़ दी थी-

()

क. जबलपूर

ख. सतना

ग. पन्ना

घ. इंदौर

III. रिक्त स्थानों को पूर्ति कीजिए-

5M

1. कलियाँ _____ हैं।

2. बदलू लेखक को _____ की गोलियाँ बना कर देता था।

3. बदलू को _____ चूड़ियों से चिढ़ थी।

4. बस _____ थी।

5. _____ मित्रों ने बस से जाने का निश्चय किया-

IV. निम्नलिखित शब्दों के अर्थ लिखिए-

3M

1. मृदुल _____

2. गात _____

3. चाव _____

4. पैतृक _____

5. निमित्त _____

6. बियाबान _____

V. शुद्ध शब्द को चयन कीजिए-

2M

1. क. समाजिक

ख. सामाजिक

()

ग. समजइक

घ. सामाजीक

2. क. व्यवसाय

ख. ववसाय

()

ग. व्यासआय

घ. वायसाय

Azaan International School

Self / Peer - Assessment –Sep 2019

Grade: VIII
Time : 20 min

Subject: Hindi
Marks :20

कार्यपत्रक-1

I. निम्नलिखित शब्दों में से उपसर्ग व मूल शब्द अलग - अलग करके लिखिए-

2M

1. अधपका _____
2. लापरवाह _____
3. निङर _____
4. अवगुण _____

II. दिए गए मुहावरों के ठीक अर्थ चयन कीजिए-

4M

1. अकल पर पत्थर पड़ना- ()
क. गले लगाना ख. बीती बातें करना ग. बुद्धि नष्ट होना। घ. बुद्धि बढ़ना
2. चकमा देना- ()
क. धोखा देना ख. घबरा जाना ग. बहुत सम्मान देना। घ. नष्ट होना
3. सुलझ जाना- ()
क. हल नहीं होना ख. हल होना ग. समस्या होना घ. इनमें से कोई नहीं
4. असर पड़ना- ()
क. कोशिश करना है ख. प्रयास करना ग. प्रभाव पड़ना घ. इनमें से कोई नहीं

III. संधि कीजिए-

2M

1. कवि+ इंद्र की संधि है- ()
क. कवींद्र ख. कविंद्र ग. कवींद्र घ. कर्वेद्र
2. विद्या+अर्थी की संधि है- ()
क. विद्यार्थी ख. विद्यर्थी ग. विद्यार्थियों घ. विध्यार्थी

IV. संधि-विच्छेद कीजिए-

2M

1. परमाणु
2. सूर्योदय

V. दिए गए वाक्यों को शुद्ध करके पुनः लिखिए-

3M

1. मैं मेरा काम करूँगा। _____
2. मौसम बहुत सुहावनी है। _____
3. यह काम किसने करा है। _____

VI. निम्नलिखित शब्दों के पर्यायवाची शब्द लिखिए-

2M

- | | |
|----------------|--------------------|
| 1. क्रोध _____ | 2. अग्नि _____ |
| 3. अमृत _____ | 4. प्रसन्नता _____ |

VII. रिक्त स्थानों की पूर्ति उचित कारक चिन्हों से कीजिए-

2M

1. भैया दीदी _____ उपहार दे रहा है।
2. बच्चे _____ दूध पिया।

VIII. निम्नलिखित कारक के विभक्ति चिन्ह लिखिए-

2M

1. संप्रदान कारक _____
2. करण कारक _____
3. अधिकरण कारक _____
4. कर्ता कारक _____

IX. दिए गए शब्द समुहों के लिए एक शब्द लिखिए-

1M

1. जिसका अंत ना हो जिसका _____
2. जानने की इच्छा _____

Azaan International School

Self / Peer - Assessment – 2019

Grade: 8
Time : 20 min

Subject: Hindi
Marks :20

Name of the Student: _____

कार्यपत्रक-1

I. निम्नलिखित गद्यांश को पढ़कर उचित विकल्प को चयन कीजिए-

6M

मनुष्य का जीवन संघर्षों से भरा है। यदि जीवन में संघर्ष और असफलता न हो, तो सफलता के आनंद की सच्ची अनुभूति भी नहीं हो सकती। पराजय होने पर भाग्य को दोषी ठहराना . पतन की ओर ले जाता है । यदि सच्ची लगन हो और असफलता के कारणों को ढूँढकर नए उस्तह के साथ ईमानदारी से प्रयास जारी रखें, तो सफलता मिलना निश्चित है। कहा जाता है कि दृढ़ इच्छाशक्ति वाला मनुष्य कभी असफल नहीं होता। निरंतर संघर्ष करनेवाला व्यक्ति ही पूरी तरह निखरता है और अंत में विजय प्राप्त करने में सफल होता है। दूसरी ओर मन से हार जाने वाला व्यक्ति आरंभ से ही गलत तर्क गढ़ने लग जाता है और आलसी बनकर अपने भाग्य और जीवन को कोसता रहता है।

1. यदि जीवन में असफलता न हो, तो क्या नहीं हो सकती? ()

(क) सच्ची अनुभूति (ख) सच्ची सफलता

(ग) सच्चा आनंद (घ) सच्चा जीवन

2. कैसा मनुष्य कभी असफल नहीं होता? ()

(क) सच्चा (ख) अच्छा

(ग) अच्छी लगनवाला (घ) दृढ़ इच्छा शक्तिवाला

3. आलसी व्यक्ति किसे कोसता है? ()

(क) दूसरों को (ख) भाग्य को

(ग) असफलता को (घ) स्वयं को

4. गद्यांश के लिए उचित शीर्षक को चयन कीजिए - ()

(क) इच्छा (ख) जीवन और संघर्ष

(ग) आलस्य (घ) मेरा जीवन

5. 'असफलता' शब्द में मूल शब्द, उपसर्ग एवं प्रत्यय को चयन कीजिए - ()

(क) सफलता , अ (ख) अ,सफल ,ता

(ग) असफलता (घ) अ,सफल

6.उपरोक्त अनुच्छेद में से किन्हीं दो विलोम शब्दों को लिखिए?

II. निम्नलिखित वाक्यों में से उपसर्ग वाले शब्द को छांटकर लिखिए- 3M

1. यदि कोई आपके साथ दुर्व्यवहार करे तो भी आप उसका सम्मान करें । _____
2. दूसरों के लिए काँटे बोना हमारे लिए अकल्याणकारी सिद्ध होता है। _____
3. सत्य का स्वरूप प्रगतिशील व सुखदायक है। _____

III. कोष्ठक में दिए शब्दों में से उचित प्रत्यय लगाकर वाक्य पूरे कीजिए- 5M

1. सबको (मीठा) बांटी गई।
2. रानी के (बोला) पर सब मुस्कुरा दिए।
3. (मानव) की ओर हमारा ध्यान कम ही जाता है।
4. (मित्र) माँगती है त्याग, (सच्चा) और (निस्वार्थ)।
5. क्या मैं तुम्हारे कमरे की (तलाश) ले सकता है।

IV. निम्नलिखित वाक्यों को शुद्ध करके लिखिए - 4M

1. तुमको कितने भाई है? _____
2. सुन्दर निकला है चाँद। _____
3. जितनी करनी वैसी भरनी। _____
4. वह भय से डरा हुआ था। _____

V. निम्नलिखित वाक्यों में प्रयुक्त विलोम शब्दों को रेखांकित करके लिखिए- 2M

1. गुरु ने अपने शिष्य को बुलाकर समझाया। _____
2. भाषा द्वारा विचारों का आदान-प्रदान होता है। _____

Azaan International School

Self / Peer - Assessment – 2019

Grade: 8
Time: 20 min

Subject: Hindi
Marks: 20

Name of the Student: _____

कार्यपत्रक- 2

I. बहुविकल्पी प्रश्नोत्तर-

14M

1. 'साखियाँ' किसके द्वारा रचित हैं? ()
(क) बिहारी (ख) कबीर (ग) सूरदास (घ) तुलसीदास
2. साध की क्या नहीं पूछना चाहिए ()
(क) आयु (ख) जाती (ग) निवास (घ) नाम
3. हाथ में क्या फिरता है? ()
(क) रुपया (ख) थैला (ग) माला (घ) डंडा
4. कबीर किसकी निंदा करने के लिए मना करते हैं? ()
(क) पड़ोसी (ख) वृक्ष (ग) घास (घ) पशुओं
5. 'तरुवर' शब्द का अर्थ क्या है? ()
(क) वृक्ष (ख) पतवार (ग) तलवार (घ) रविवार
6. 'कामचोर' कहानी की लेखिका कौन हैं? ()
(क) महादेवी वर्मा (ख) इस्मत चुगताई (ग) कृष्णा सोबती (घ) जया जादवानी
7. 'यह भला काम करेंगे' - यह किसका कथन है? ()
(क) अम्मा का (ख) अब्बा का (ग) दीदी का (घ) दादी का
8. घमासान युद्ध किसके पास हुआ - ()
(क) मुर्गियों के दड़बे के पास (ख) पानी के मटकों के पास
(ग) भैंस का दूध निकालते हुए (घ) भेड़ों को खाना देते हुए ।

9. पेड़ों को पानी देने के लिए सब लोग किस पर टूट पड़े - ()

(क) कुएँ पर (ख) नल पर (ग) बाल्टियों पर (घ) पेड़ों पर

10. भूखी भेड़े किस का सूप देखकर झपटी - ()

(क) दाने का (ख) टमाटर का (ग) मटर का (घ) सेब का

11. 'अगर किसी बच्चे ने घर की किसी चीज़ को हाथ लगाया तो बस, रात का खाना बंद हो जायेगा'-यह कथन किसका है ? ()

(क) अब्बा का (ख) अम्मा का (ग) दादी का (घ) दीदी का

12. मातम-सा मनाने वाली किस के आँसू पोंचे गए - ()

(क) अम्मा का (ख) दादी का (ग) दीदी का (घ) तरकारी वाली के

13. 'ऐ हे! खुदा के लिए नहीं, घर में बाढ़ आ जाएगी।' यह कथन किसका है ? ()

(क) अब्बा का (ख) अम्मा का (ग) दादी का (घ) इनमें से कोई नहीं

14. अम्मा कहाँ जाने के लिए सामान बाँधने लगी - ()

(क) लखनऊ (ख) आगरा (ग) कानपूर (घ) इलाहबाद

II. निम्नलिखित मुहावरों के अर्थ लिखकर वाक्य में प्रयोग कीजिए- 2M

1. घमासान युद्ध होना - _____

2. चुनौती देना - _____

III. निम्नलिखित शब्दों के व्याकरणिक नाम लिखिए- 4M

1. उसने सफ़ेद शेर देखा। _____

2. आप बहुत अच्छे आदमी हैं। _____

3. महात्मा गाँधी प्रतिदिन व्यायाम किया करते थे। _____

4. हमें आलस्य को छोड़ना चाहिए। _____

Azaan International School

Self / Peer - Assessment – 2019

Grade: VIII
Time: 20 min

Subject: Mathematics
Marks: 10

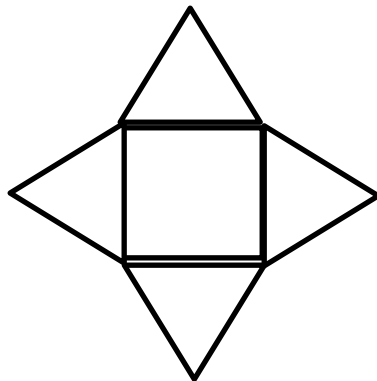
Name of the student: _____

Chapter: Visualising Solid Shapes

I. Choose the correct answers:

5x1=5m

1. A Polyhedron whose base and top are Congruent polygons and whose other faces are parallelogram in shape is a
a) Cone b) Sphere c) Pyramid d) Prism
2. Number of vertices in a Triangular Prism
a) 10 b) 8 c) 6 d) 4
3. The 3-D shapes have
a) Length b) breadth, length c) length, breadth, height d) none
4. The number of Triangular faces in a regular octahedron is
a) 5 b) 9 c) 6 d) 8
5. Faces of regular polyhedron are
a) Similar b) equal c) unequal d) none
6. Two important members of polyhedron family around are
a) Cone, Cylinder b) Prism, Pyramid c) Square, Rectangle d) Circle, Hemisphere
7. The Euler's formula for polyhedron is
a) $F+V=E+2$ b) $F+E=V+2$ c) $V=E+2$ d) $F-V=E-2$
8. The polyhedron that can be made after folding the given net is
a) Square Pyramid b) Triangular prism c) Prism with square base d) none



9. If the number of Edges in a polyhedron is 12, number of vertices is 6, number of Faces are..
a) 8 b) 7 c) 12 d) 10
10. If a 3D shape has 6 flat rectangular faces, 12 straight edges, 8 vertices, than the shape is a.
a) Cube b) Cuboid c) Cylinder d) none

Azaan International School

Self / Peer - Assessment – 2019

Grade: VIII
Time: 20 min

Subject: Mathematics
Marks: 10

Name of the student: _____

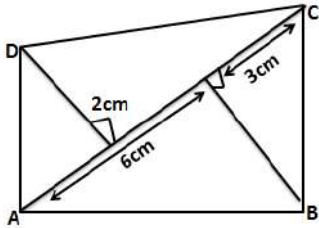
Chapter: Mensuration

I. Choose the correct answers:

10x1=10m

1. Area of the quadrilateral ABCD

- a) 8cm^2 b) 10cm^2 c) 12cm^2 d) 15cm^2



2. The area of four walls of a room whose length 12m, width 8m, height is 10m is

- a) 100m^2 b) 200m^2 c) 400m^2 d) 600m^2

3. The height of a triangle whose base is 60cm and Area is 600cm^2 is

- a) 24cm b) 20cm c) 12cm d) 10cm

4. Area of semicircle whose diameter is 14cm is

- a) 49cm^2 b) 70cm^2 c) 77cm^2 d) 152cm^2

5. Area of trapezium whose parallel sides of length 'a'cm & 'b'cm, altitude between them is 'h'cm the formula to find its area is.....

- a) $\frac{1}{2} h(a + b)$ b) $\frac{1}{2} b \times h$ c) $b \times h$ d) none

6. The volume of cuboid is 200cm^3 and base area is 25cm^2 than height of a cuboid is

- a) 4cm b) 8cm c) 10cm d) 12cm

7. Surface area of cuboid whose length 'l'cm breadth is 'b'cm and height is 'h'cm is.....

- a) $2(hl + bh + bl)$ b) $(hbh + bl)$ c) $2(l \times b \times h)$ d) none

8. The diameter of a circle with radius 4cm is

- a) 2cm b) 18cm c) 14cm d) 8cm

9. The area of a base of a circular cylinder is 35cm^2 and its height is 12cm , its volume is
- a) 70cm^3 b) 140cm^3 c) 210cm^3 d) 420cm^3
10. If the area of two circle are in ratio $25:36$ than the ratio of their circumference is.....
- a) $5:6$ b) $4:7$ c) $2:3$ d) $4:1$

Azaan International School

Self / Peer - Assessment – 2019

Grade: VIII
Time: 20 min

Subject: Mathematics
Marks: 10M

Name of the student: _____ **Date:** _____

Ch.3 Understanding Quadrilaterals

1. A Polygon is a simple _____ curve made up of _____.
2. In _____ polygon, the length of the sides and angles are same measure.
3. In _____ polygon, atleast one angle is more than 180° .
4. In _____ polygon, all the angles is less than 180°
5. The sum of exterior angles of a polygon is _____.
6. The sum of measure of all angles of n-sided polygon is _____.
7. No. of sides = _____ .each exterior angle: _____.
8. Define parallelogram and write its properties.

Azaan International School

Self / Peer - Assessment – 2019

Grade: VIII
Time: 20 min

Subject: Mathematics
Marks: 20M

Name of the student: _____ **Date:** _____

I. Multiple choice Questions:

1. When 25% is expressed as a fraction, we get ()
a. $\frac{1}{4}$ b. 2.5 c. 25 d. $\frac{5}{4}$
2. When 36% is expressed as a ratio, we get ()
a. 9:16 b. 9:25 c. 16:9 d. 25:9
3. Simple interest on rs 40,000 at the rate of 8% p.a for a period of 3 years is _____. ()
a. 9,500 b. 9000 c. 9,600 d. 1,20,000
4. 35% of 2000 = _____. ()
a. 900 b. 700 c. 3,500 d. 70,000
5. The MP=6000 and S.P =51000, then d%= _____. ()
a. 10% b. 15% c. 20% d. 25%

II. Fill in the blanks:

1. A car was bought at rs 3,42,000 its value depreciation at the rate of 6% per annum. After one year the value of the car is _____.
2. An almirah is sold at rs 5220 after allowing a discount of 5%. The M.P is _____.
3. I purchased a Hair-dryer for rs 5400 including 8% VAT. The price before VAT is added is _____.
4. What is the amount if the P= rs 4,000, R=10% p.a, T=1yr. When it is compounded halfyearly _____.
5. An article is bought for Rs 500 and sold for s 580. The gain % is _____.

Azaan International School

Self / Peer - Assessment

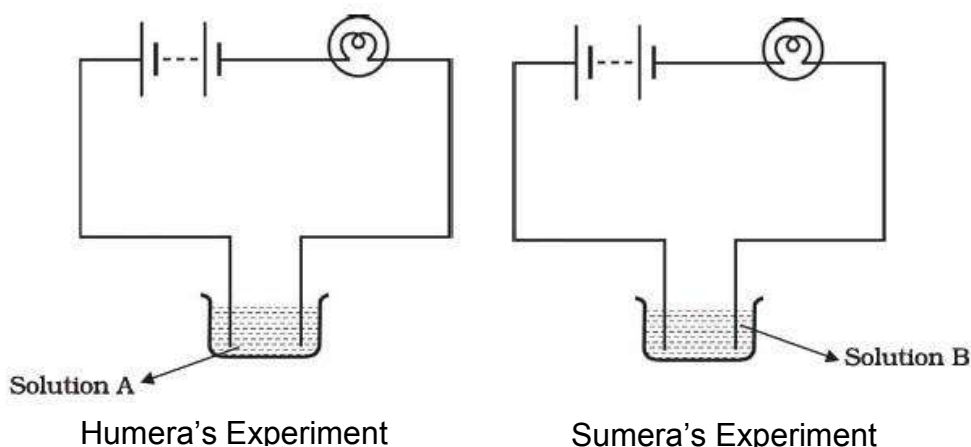
Grade: VIII
Time : 20 min

Subject: Science
Marks : 10

Name of the Student: _____

Chapter: Chemical Effects of electric current

1. An electric current can produce _____
(a) Heating effect (b) chemical effect (c) magnetic effect (d) all of these.
2. Electroplating is not done with _____
(a) silver (b) zinc (c) gold (d) iron
3. Humera and Sumera performed experiments taking similar bulbs and cells but two different solutions A and B as shown in figure below.



They found that the bulb in the setup A glows more brightly as compared to that of the setup B. You would conclude that

- (a) higher current is flowing through the circuit in setup A.
- (b) higher current is flowing through the circuit in setup B.
- (c) equal current is flowing through both the circuits.
- (d) the current flowing through the circuits in the two setups cannot be compared in this manner.

4. Chromium plating is done because, chromium _____

- (a) is less expensive
- (b) has a shiny appearance
- (c) gets corroded
- (d) does not resist scratches.

5. Seema's uncle has set up an electroplating factory near his village. He should dispose off the waste of the factory _____

- (a) in the nearby river.
- (b) in the nearby pond.
- (c) in the nearby cornfield.
- (d) according to the disposal guidelines of the local authority.

6. When electric current is passed through a conducting solution, there is a change of colour of the solution. This indicates _____

- (a) the chemical effect of current.
- (b) the heating effect of current.
- (c) the magnetic effect of current.
- (d) the lightning effect of current.

7. Which of the following is an insulator?

- (a) Human body
- (b) graphite
- (c) Pure water
- (d) copper

8. When electrodes were immersed in water, and current is passed, oxygen bubbles are formed on the electrode connected to _____ terminal of the battery and hydrogen bubbles are formed on the _____ terminal of the battery,

- (a) negative, positive
- (b) positive, negative
- (c) negative, negative
- (b) positive, positive

9. Which one of the following solutions will not conduct electricity?

- (a) lemon juice
- (b) vinegar
- (c) tap water
- (d) vegetable oil

10. The process of depositing a layer of any desired metal on another material by means of electricity is called _____.

- (a) electrolysis
- (b) electroplating
- (c) electric current
- (d) none of these.

Azaan International School

Self / Peer - Assessment –Sep 2019

Grade: VIII
Time : 20 min

Subject: Science
Marks : 10

I. Choose the correct option.

1. Which of these is not a rabi crop? ()
a. Rice b. Barley c. Wheat d. Peas and beans
2. Which of these helps us to get rid of pests? ()
a. Pesticides b. Weedicides c. Thresher d. Compost
3. Which of these help in making cheese and paneer? ()
a. Lactobacillus b. Bacteria c. Protozoa d. Algae
4. Which of the following processes is carried out in the preservation of milk? ()
a. Canning b. Adding vinegar c. Adding salt and sugar d. Pasteurization
5. Which of the following is a natural fibre? ()
a. Acrylic b. Polyester c. Nylon d. Cotton
6. Melamine is used for making _____ ()
a. Kitchenware b. Fire-resistance fabric c. Flooring Tiles d. all of them
7. Which gas is produced when metals react with acids? ()
a. Oxygen b. Carbon dioxide c. Nitrogen d. Hydrogen
8. Which of the following is a good conductor of electricity? ()
a. Plastic b. Coal c. Copper d. Sulphur
9. The SI unit of force is ()
a. Meter b. Centimeter c. Newton d. Second
10. Which of these can be used to reduce friction? ()
a. Oil b. Grease c. Ball bearings d. All of these
11. Pressure can be defined as. ()
a. Force per volume b. Force per capacity
c. Force per unit area d. Twice the force
12. When we immerse one end of a drinking straw in a liquid and suck at the other end , we create a _____. ()
a. Low pressure area in the liquid b. Low pressure area inside the straw

- c. High pressure area inside the liquid d. High pressure area inside the straw
13. The SI unit of frequency is _____. ()
a. Newton b. Pascal c. Hertz d. Volts
14. Sound is produced because of ()
a. Air molecules b. Vibrations c. Strings of a pendulum d. Vacuum
15. In which of the following material is the speed of sound maximum? ()
a. Iron b. Sea water c. fresh water d. Air
16. Sound can travel through ()
a. Solids and liquids b. Liquids and gases
c. Gases and solids d. Solids, liquids and Gases
17. Which of these is an endemic species of India? ()
a. Giant panda b. Dodo c. African elephant d. Asiatic Lion
18. Which of these is an endangered species? ()
a. Dodo b. Dinosaur c. Asiatic Lion d. All of these
19. Which of these wild life sanctuaries / natural parks protects the tigers? ()
a. Bandhavgarh b. Kanha c. Corbett d. All of these
20. Which of these methods of irrigation leads to a lot of water wastage ? ()
a. Dhekli and rahat b. Drip irrigation c. Sprinkler irrigation d. All of these

Azaan International School

Self / Peer - Assessment – 2019

Grade: VIII
Time: 20 min

Subject: Science
Marks: 10m

6.Combustion and Flame

1. A good fuel should have _____. ()
(a) low ignition temperature (b) high calorific value
(C) low cost and easy availability (d) all of these
2. Which of the following fuel has highest calorific value? ()
(a) Wood (b) Coal (c) Hydrogen (d) Petrol
3. Water is used to extinguish fire because _____. ()
(a) reduces the ignition temperature of the burning substances.
(b) cools the burning substance below its ignition temperature.
(c) makes a blanket of water vapour and cuts off the oxygen
(d) both (b) and (c)
4. Inflammable substances have _____. ()
(a) high ignition temperature (b) low ignition temperature
(c) moisture (d) none of these
5. Liquid hydrogen is used as fuel in _____. ()
(a) vehicles (b) stoves (c) space craft (d) candles
6. When a wax candle burns, which part of its catches fire? ()
(a) Wick (b) Wax vapour (c) Solid wax (d) none of these
7. Which of these is a non-combustible substance? ()
(a) Sand (b) Wood (c) Paper (d) Cloth
8. Which of these is not a inflammable substance? ()
(a) Petrol (b) LPG (c) Alcohol (d) Wood
9. Combustion takes place in the presence of _____. ()
(a) carbon dioxide (b) hydrogen (c) nitrogen (d) oxygen
10. Name the zone of the candle flame where there is no combustion. ()
(a) the innermost zone (b) the middle zone
(c) the outer zone (e) all of these

Azaan International School

Self / Peer - Assessment – 2019

Grade: VIII
Time: 20 min

Subject: Science
Marks : 10m

8.The Cell – Structure and Functions

1. Which of the following is not a single-celled organism? ()
(a) Amoeba (b) Yeast (c) Mushroom (d) Euglena
2. Which of the following is an organ? ()
(a) Amoeba (b) Yeast (c) Leaf (d) Hen's egg
3. Which of the following structures are not present in all cells? ()
(a) Plastids (b) Cytoplasm (c) Nucleus (d) Cell membrane
4. Which of these are the organelles present in cytoplasm? ()
(a) mitochondria (b) golgi bodies (c) ribosomes (d) all of these
5. Plant cells differ from animal cells in having an additional layer around the cell membrane called _____. ()
(a) chloroplast (b) cytoplasm (c) vacuole (d) cell wall
6. Some of the _____ contain green pigment called chlorophyll. ()
(a) cell (b) plastids (c) vacuole (d) nucleus
7. The cells having nuclear material without nuclear membrane are called _____. ()
(a) prokaryotic cells (b) eukaryotic cells
(c) both (a) and (b) (d) none of these
8. Name the unit of inheritance in living organisms. ()
(a) Cell (b) Organ (c) Gene (d) Nucleus
9. Which of the following is the largest cell? ()
(a) Spherical red blood cells (b) Spindle shaped muscle cells
(c) Long branched nerve cell (d) egg of an ostrich
10. What is the basic structural unit of a living organism? ()
(a) organ (b) tissue (c) cell (d) organ system

Azaan International School

Grade: VIII _____

Subject: Science

Name of the student: _____

Date: _____

Ch:8- Reproduction in Animals

1. Name the organ producing the male gamates.

A: _____

2. Name the organ in the female body where development of the baby takes place.

A: _____

3. What type of fertilization takes place in humans and dogs?

A: _____

4. What type of fertilization takes place in fish?

A: _____

5. What name is given to animals which give birth to young ones?

A: _____

6. What name is given to animals which lay eggs?

A: _____

7. Name the method by which Amoeba reproduce.

A: _____

8. How many sperms are produced by the testis?

A: _____

9. In human beings how many eggs are produced every month?

A: _____

10. What is an embryo?

A: _____

11. Define fertilization.

A: _____

12. How much time does it takes the embryo to develop into a chick?

A: _____

Ch: 9- Reaching the Age of Adolescence

1. Which gland is called master gland?

A: _____

2. Name the female hormone.

A: _____

3. How many chromosomes are present in human cell?

A: _____

4. How many sex chromosomes are there in human cell?

A: _____

5. Which hormone is necessary for normal growth of a person?

A: _____

6. Which gland secretes insulin?

A: _____

7. What causes diabetes?

A: _____

8. Which hormone prepares the body for stress situations?

A: _____

9. Which hormone controls the metamorphosis of tadpole into frog?

A: _____

10. Which hormone controls the metamorphosis of larva into insect?

A: _____

11. What decides the sex of an unborn child?

A: _____

12. Write the different stages in the life cycle of a butterfly.

A: _____

Azaan International School

Self / Peer - Assessment

Grade: VIII
Time : 20 min

Subject: Science
Marks : 10

Name of the student:_____

Ch: Light

I. Choose the correct answer:

1. Part of the eye which controls the light entering is called _____
(a) iris (b) cornea (c) lens (d) retina
2. We can see a non-luminous object when light _____
(a) emitted by object falls on the eye.
(b) is reflected from the objects towards our eye.
(c) completely passes through the object.
(d) gets completely absorbed by the object.
3. Angle of incidence is equal to angle of reflection.
(a) always (b) sometimes (c) under special conditions (d) never
4. Image formed by a plane mirror is _____
(a) virtual, behind the mirror and enlarged.
(b) virtual, behind the mirror and of the same size as the object.
(c) real at the surface of the mirror and enlarged.
(d) real, behind the mirror and of the same size as the object.
5. The size of the pupil becomes _____ when you see in dim light.
(a) increases (b) decreases (c) remains same (d) none of these
6. On increasing the angle between the two reflecting surfaces, the number of images _____
(a) decreases (b) increases (c) does not change (d) none of theses
7. The image of an object is retained on the retina for about _____
(a) one-sixteenth of a second (b) one – fifteenth of a second
(c) one-seventeenth of a second (d) one-tenth of a second.

8. _____ is the line perpendicular to the surface of the mirror at the point of incidence.

- (a) incident ray (b) reflected ray (c) normal (d) none of these

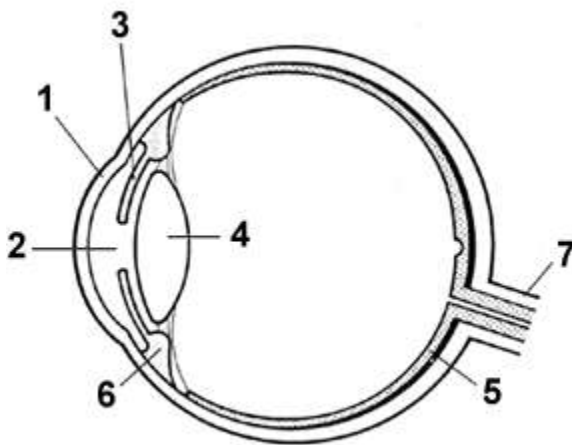
9. Food rich in vitamin A is _____

- (a) carrots (b) broccoli (c) spinach (d) all of these

10. Which of the following statements is correct regarding rods and cones in the human eye?

- (a) Cones are sensitive to dim light.
(b) Cones are sensitive to bright light.
(c) Rods are sensitive to bright light.
(d) Rods can sense colour.

II. Write down the names of parts of the eye in the blank spaces shown in the figure.



1. _____
2. _____
3. _____
4. _____
5. _____
6. _____
7. _____

III. Fill up the blanks.

If you touch your _____ ear with right hand in front of a plane mirror, It will be seen in the mirror that your right ear is touched with _____.

This is known as _____.

Azaan International School

Self / Peer - Assessment – 2019

Grade: VIII
Time : 20 min

Subject: Social Science
Marks :10

Name of the student: _____

CH 4: AGRICULTURE CH 5: INDUSTRIES

I. Answer the following in one word:

10x½=5m

1. What is 'The Science and Art of cultivation on the soil and rearing' live stock is called ?

Ans: _____.

2. What is the term used to rear silk worms?

Ans: _____.

3. What is the term used to grow vegetables , flowers and fruits for commercial use?

Ans: _____.

4. Cultivation of grapes is known as?

Ans: _____.

5. What are the two types of farming ?

Ans: _____.

6. What is organic farming?

Ans: _____.

7. Where does the word agriculture originate from?

Ans: _____.

8. What does the term Industry mean?

Ans: _____.

9. What is farm system?

Ans: _____.

10. What is other name of Shifting Cultivation?

Ans: _____.

Azaan International School

Self / Peer - Assessment – 2019

Grade: VIII
Time : 20 min

Subject: Social Science
Marks :10

Name of the student: _____

Ch.6: UNDERSTANDING OUR CRIMINAL SYSTEM(C)

Ch7: WEAVERS, IRON SMELTERS AND FACTORY OWNERS (H)

I. Choose the correct option:

5m

1. One of the most important Indian ports of the 17th century ()
a) Bombay b) Madras c) Surat d) Vishkapatnam
2. Bandanna patterns were mostly produced in ()
a) Rajastan, Gujrat b) Rajasthan ,Orrisa c) Rajasthan, M.P d) Chattisgarh, west bengal
3. The job of Arangrez was to ()
a) Weave cloth b) Dye thread c) transport goods to markets d) spin thread on charka
4. The first cotton mill in India was established in ()
a) Guj Rath b)Bombay c) Madras d) West Bengal.
5. Wootz steel was produced all over ()
a) south India b)north India c) central India d) North east India

II. Answer the following in one word:

3m

1. Name the four key players in the Criminal Justice system

_____	_____
_____	_____

2. What is FIR?

Ans: _____

3. What do you understand by 'fair trial'?

Ans: _____

III. Fill in the blanks:

2m

1. Tippu's sword was made up of _____ steel.
2. India's textile exports declined in the _____ century.
3. Indian wootz steel fascinated _____ scientists.
4. The Tata Iron and steel factory is situated on the banks of the river _____.

Azaan International School

Self / Peer - Assessment – 2019

Grade: VIII
Time: 20 min

Subject: Social Science
Marks: 10

Name of the student: _____

Worksheet – 3

I. Fill up the blanks:

1. _____ is a person who can read, write and teach poem.
2. _____ is a person with scholarly knowledge of the language and culture.
3. _____ is a term generally used to refer to a local language or dialect from what is seen as the standard language.
4. _____ is a Arabic word for a place of learning, any type of school or college.
5. One of the most vocal amongst the low-caste leader was _____.

II. Choose the correct answer:

1. The brahmo samaj was founded by ()
 - a. Dayanand saras wati
 - b. Rajaram mohan roy
 - c. Vivekananda
 - d. Eshwar Chandra vidya sagar
2. The practice of sati was banned in the year _____. ()
 - a. 1800
 - b. 1821
 - c. 1827
 - d. 1829
3. A widow home was established at pune by _____. ()
 - a. tara bai shinde
 - b. Pandita rama bai
 - c. Mumtaz Ali
 - d. Rokeya Sakhawat Hossain

4. Peasants and Artisans were referred to as _____. ()

- a. Vaishyas
- b. Sudhras
- c. Untouchables
- d. Kshatriyas

5. Periyar founded _____.

- a. self-respect movement
- b. temple entry movement
- c. Paramhans mandali
- d. Dalit movement

6. Madigas were an important untouchable caste of present day's: ()

- a. Madhya Pradesh
- b. Orissa
- c. Bihar
- d. Andhra Pradesh

7. A reform association known as 'Brahmo Samaj' was formed by: ()

- a. Raja Ram Mohan Roy
- b. Pandit Ishwar Chandra Vidyasagar
- c. Keshav Dutt
- d. Rabindranath Tagore

8. The practice of 'Sati' was banned in: ()

- a. 1826
- b. 1827
- c. 1828
- d. 1829

9. The Mohammedan Anglo oriental College was founded by: ()

- a. Muhammed Ali
- b. Shoukath Ali
- c. Sayyid Ahmed Khan
- d. Deoband School

10. Young Bengal movement was started by: ()

- a. Henry Derozio
- b. James Mill
- c. Henry Thomas
- d. William Jones

Azaan International School

Self / Peer - Assessment – 2019

Grade: VIII
Time: 20 min

Subject: Social Science
Marks: 10

Name of the student: _____

I. Choose the correct option:

1. The most populated continent ()
a. Asia b. Africa c. Europe d. South America
2. The least number of people live in this continent ()
a. North America b. Europe c. Oceania d. Antarctica
3. According to population what is India's rank in the world ()
a. Seventh b. Second c. Fifth d. First
4. In 1999 the world population reached ()
a. 1 billion b. 3 billion c. 6 billion d. 4 billion
5. Which are the three main factor that cause the population change ()
a. Births, death and marriage b. Births, death and migration
c. Births, death and life expectancy d. Births, deaths and emigration
6. What is a Population pyramid? ()
a. a graphical representation of the age, sex composition of a population.
b. When the population density of an area is so high that people live in tall buildings.
c. Pattern of population distribution in large urban areas.
d. illustration of emigrants and immigrants
7. Articles 17 of the constitution states that the following practice has been abolished ()
a. Trafficking b. beggar c. untouchability d. employment of children
8. Reservations play an important role in providing social justice to ()
a. Adivasis b. Dalits c. Muslims d. Hindus
9. Manual scavengers in different parts of the country are known by the names of: ()
a. Bhangis in Gujrat b. Pakhis in AP c. Sikkaliars in Tamil Naidu d. All of these
10. The central government passed the schedule tribes and other traditional forest dwellers act in: ()
a. 2006 b. 2007 c. 2008 d. 2009